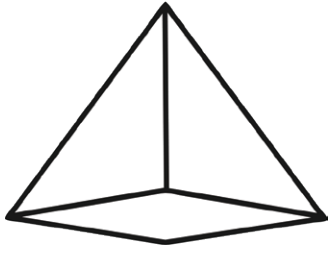


3D Shapes

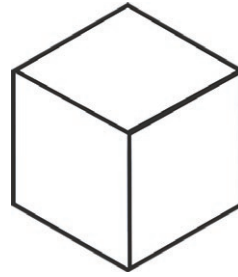


square-based
pyramid

edges _____

faces/surfaces _____

vertices _____

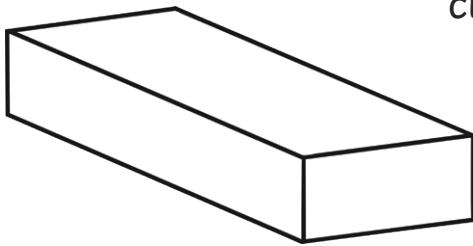


cube

edges _____

faces/surfaces _____

vertices _____

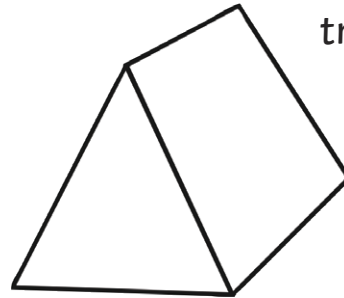


cuboid

edges _____

faces/surfaces _____

vertices _____

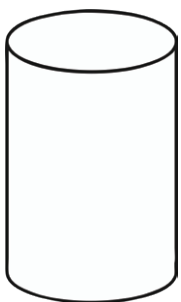


triangular prism

edges _____

faces/surfaces _____

vertices _____

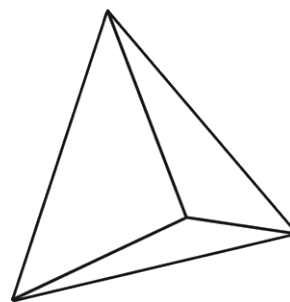


cylinder

edges _____

faces/surfaces _____

vertices _____



triangular-based
pyramid

edges _____

faces/surfaces _____

vertices _____